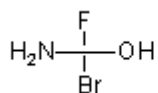
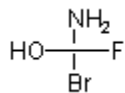


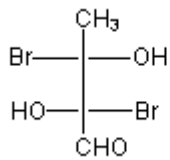
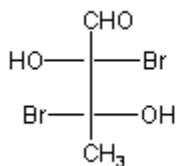
Quiz 15

Label each of the following pairs as identical, structural isomers, conformational isomers, enantiomers or diastereomers.

a)



b)



c)

